

Part B: Electromagnetism

Chapter 4: Magnetism

4.1. The Magnetic Field

4.2. The Hall Effect

4.3. Motion of a Charged Particle in a Magnetic Field

4.4. Magnetic Force on a Current-Carrying Wire

4.5. Torque on a Current-Carrying Coil

4.6. The Magnetic Dipole Moment

4.7. The Biot-Savart Law

4.8. Ampere's Law

4.9. The Magnetic Field of a Solenoid and a Toroid

4.10. The Magnetic Field of a Current-Carrying Coil

Overview

In this lecture, we study magnetic fields produced by a moving charged particle or a current. This feature of electromagnetism is the combination of electric and magnetic effects and it has become extremely important because of its application in our life

4.7. The Biot-Savart Law (Calculating the Magnetic Field Due to a Current):

Problem: We need to calculate the magnetic field B at point P due to a current

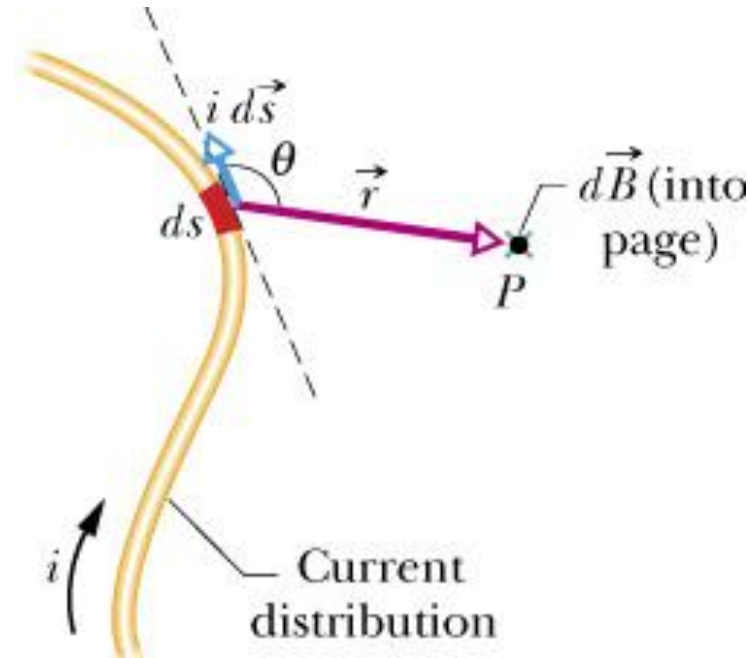
Method: We use the same principle as used to calculate the electric field due to a charge distribution:

- We divide (mentally) the wire into differential elements ds
- A differential current-length element ids
- From experiments, the field dB

$$dB = \frac{\mu_0}{4\pi} \frac{id\vec{s} \sin \theta}{r^2}$$

where θ : is the angle between $d\vec{s}$ and \vec{r}
 μ_0 : is the permeability constant

$$\mu_0 = 4\pi \times 10^{-7} \text{ T.m/A} \approx 1.26 \times 10^{-6} \text{ T.m/A}$$



The Biot-Savart law:

$$d\vec{B} = \frac{\mu_0}{4\pi} \frac{i d\vec{s} \times \vec{r}}{r^3}$$

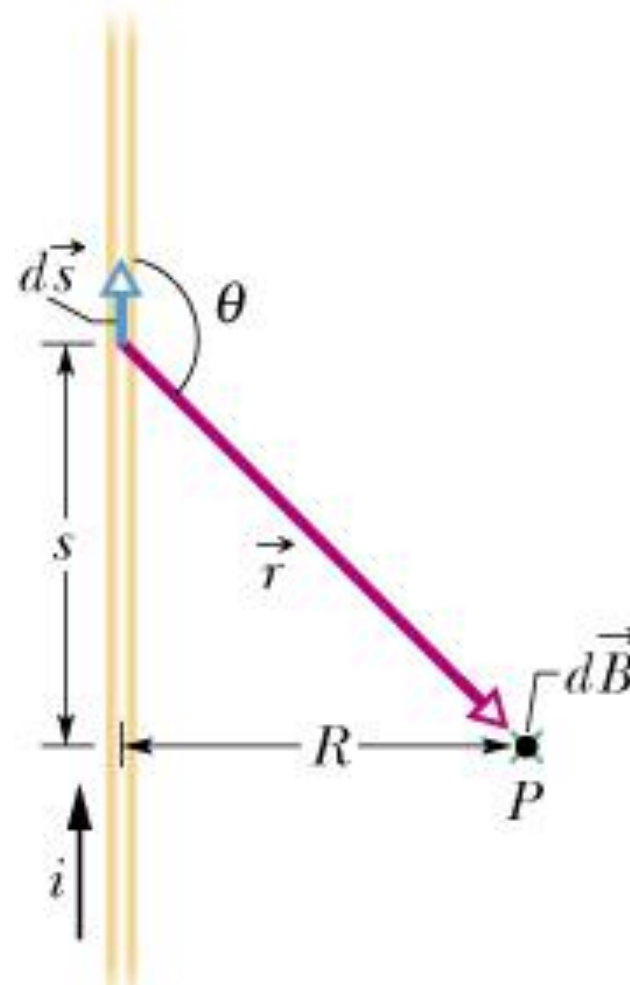
We will use the law above to calculate the magnetic field at a point due to various distributions of current

4.7.1. Magnetic Field Due to a Current in a Long Straight Wire:

$$dB = \frac{\mu_0}{4\pi} \frac{id s \sin \theta}{r^2}$$

we calculate the B field due to the upper half of the wire as shown, the total B is:

$$B = 2 \int_0^{\infty} dB = \frac{\mu_0 i}{2\pi} \int_0^{\infty} \frac{\sin \theta ds}{r^2}$$



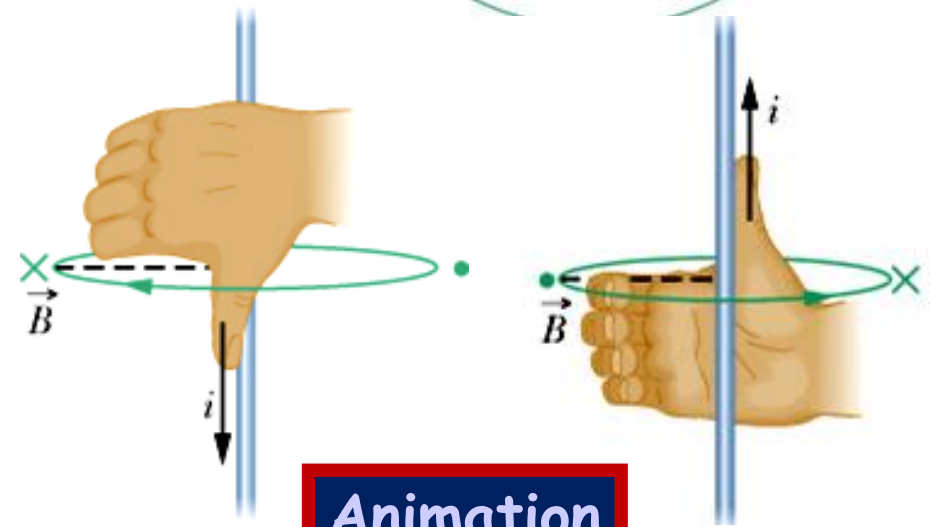
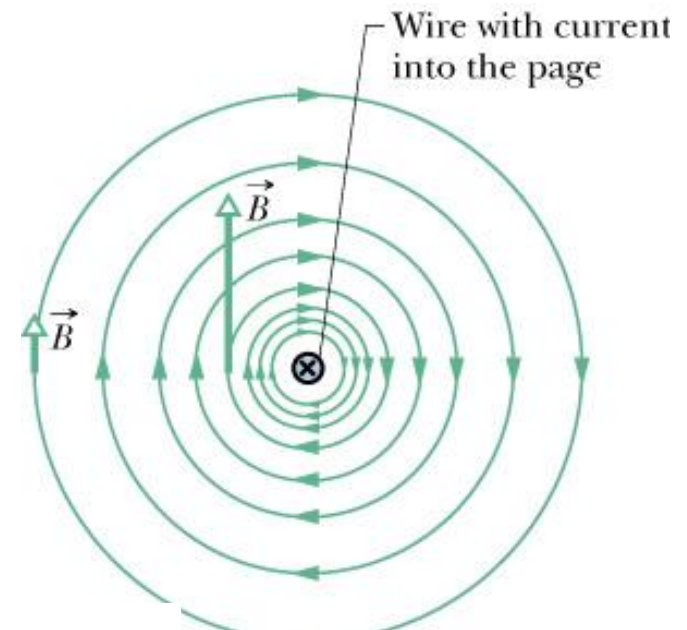
We also have: $r = \sqrt{s^2 + R^2}$

$$\sin \theta = \sin(\pi - \theta) = \frac{R}{\sqrt{s^2 + R^2}}$$

$$B = \frac{\mu_0 i}{2\pi} \int_0^\infty \frac{R ds}{(s^2 + R^2)^{3/2}}$$

(see Appendix E for the integral)

$$B = \frac{\mu_0 i}{2\pi R}$$



Animation

To determine the B direction, we use **the right hand rule**: Grasp the element in your right hand with your extended thumb pointing in the direction of the current. Your fingers will then naturally curl around in the direction of the magnetic field lines due to that element

Iron filings that have been sprinkled onto cardboard collect in concentric circles when current is sent through the central wire



4.7.1. Magnetic Field Due to a Current in a Circular Arc of Wire:

Problem: Find the magnetic field produced at a point by a current in a circular arc of wire

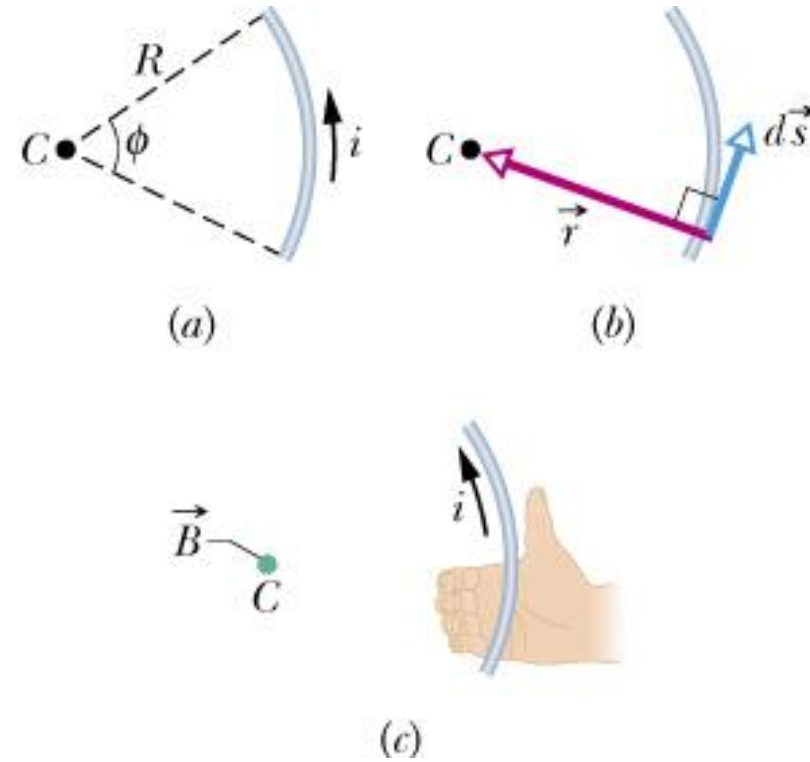
Method: We calculate the field produced by a single current-length element, then integrate to find the net field by all the elements

Example: An arc-shaped wire with angle ϕ , radius R , current i with $\theta = 90^\circ$:

$$dB = \frac{\mu_0}{4\pi} \frac{id\mathbf{s} \sin \theta}{r^2} = \frac{\mu_0}{4\pi} \frac{id\mathbf{s}}{R^2}$$

with $ds = R d\phi$:

$$B = \int dB = \int_0^\phi \frac{\mu_0}{4\pi} \frac{iR d\phi}{R^2} = \frac{\mu_0 i}{4\pi R} \int_0^\phi d\phi$$



- So, the magnitude of the field produced by a circular arc of wire:

$$B = \frac{\mu_0 i \phi}{4\pi R}$$

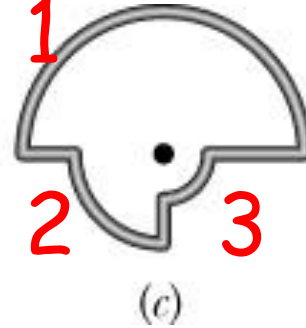
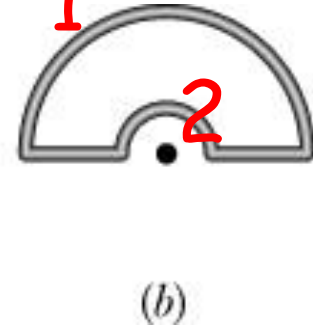
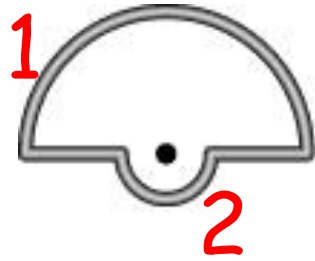
- For a full circle, the field at the center:

$$B = \frac{\mu_0 i 2\pi}{4\pi R} = \frac{\mu_0 i}{2R}$$

Note: To determine the direction of the magnetic field, we use the right-hand rule

Checkpoint: The figure shows three circuits consisting of straight radial lengths and concentric circular arcs (either half- or quarter-circles of radii r , $2r$, and $3r$). The circuits carry the same current. Rank them according to the magnitude of the magnetic field produced at the center of curvature (the dot), greatest first

$$B = \frac{\mu_0 i \phi}{4\pi R}$$



$$(a) \quad B = B_1 + B_2 = \frac{\mu_0 i \pi}{4\pi 3r} + \frac{\mu_0 i \pi}{4\pi r} \stackrel{(a)}{=} \frac{\mu_0 i}{3r}$$

$$(b) \quad B = B_2 - B_1 = \frac{\mu_0 i \pi}{4\pi r} - \frac{\mu_0 i \pi}{4\pi 3r} = \frac{\mu_0 i}{6r}$$

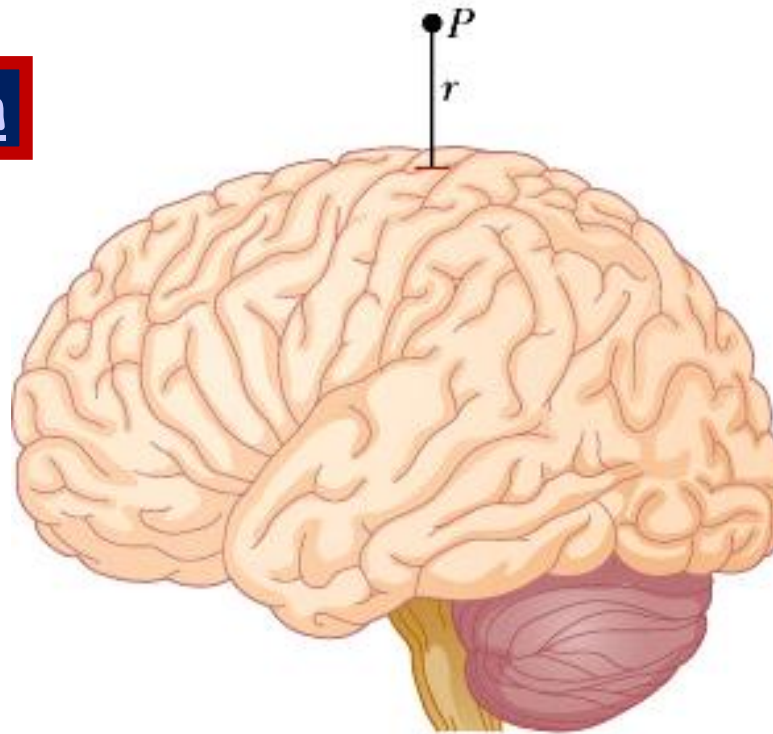
$$(c) \quad B = B_1 + B_2 + B_3$$

$$B = \frac{\mu_0 i \pi}{4\pi 3r} + \frac{\mu_0 i \pi}{4\pi 2r} + \frac{\mu_0 i \pi}{4\pi r} = \frac{13\mu_0 i}{48r}$$

Rank: a, c, b

Magnetic Field Due to Brain Activity

Animation



- In a typical pulse:
 $i = 10 \mu\text{A}$
- The conducting path length: 1 mm
- Point P at $r = 2\text{cm}$
- Angle $\theta = 90^\circ$

The magnetic fields detected in MEG (magneto-encephalo-graphy), a procedure to monitor the human brain, are probably produced by pulses (e.g., when reading) along the walls of the fissures (crevices) on the brain surface:

$$dB = \frac{(4\pi \times 10^{-7} \text{ T}\cdot\text{m} / \text{A}) (10 \times 10^{-6} \text{ A})(1 \times 10^{-3} \text{ m})}{4\pi (2 \times 10^{-2} \text{ m})^2} \sin 90^\circ = 2.5 \times 10^{-12} \text{ T}$$

→ to measure such a very small field, we need to use an instrument called SQUIDS (**Superconducting Quantum Interference Devices**)

4.7.2. Force Between Two Parallel Currents:

Problem: Two long parallel wires carrying currents exert forces on each other. Calculate those forces

The field \vec{B}_a produced by current a at the site of wire b:

$$B_a = \frac{\mu_0 i_a}{2\pi d}$$

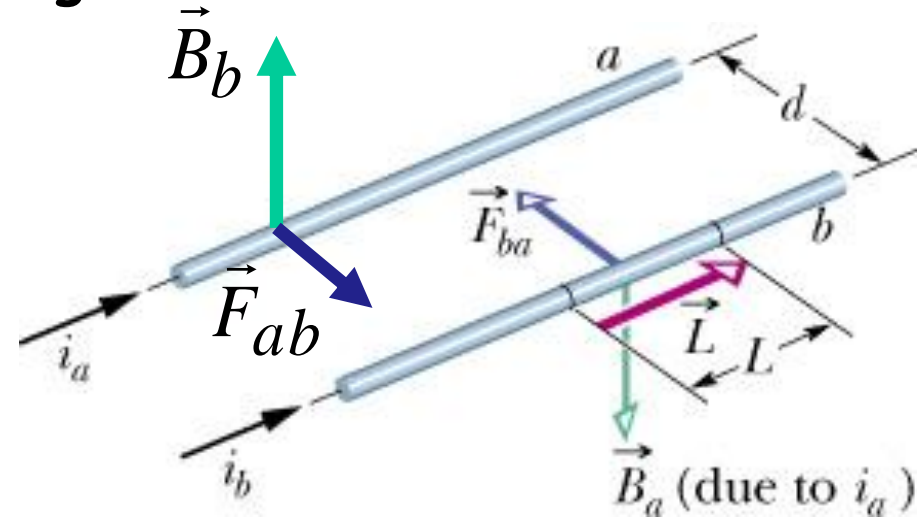
So, the force \vec{F}_{ba} acting on b from a:

$$\vec{F}_{ba} = i_b \vec{L} \times \vec{B}_a$$

The magnitude:

$$F_{ba} = i_b L B_a \sin 90^\circ = \frac{\mu_0 L i_a i_b}{2\pi d}$$

- Applying the same steps, we can also calculate \vec{B}_b at current a and \vec{F}_{ab} acting on current a is shown in the figure \rightarrow these forces pull the currents close to each other
- If the two currents are **antiparallel**, the forces **push the currents apart**

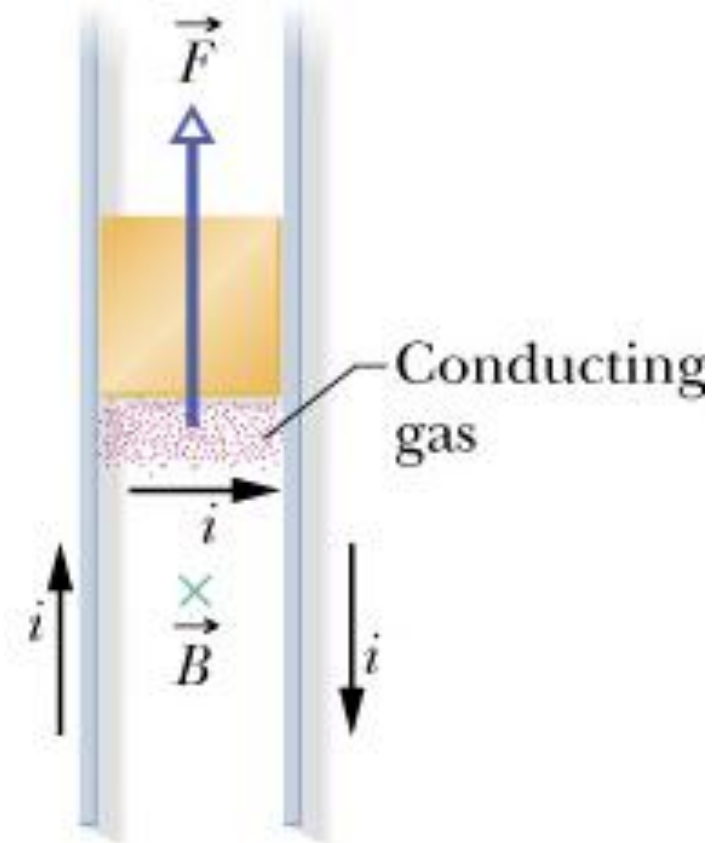
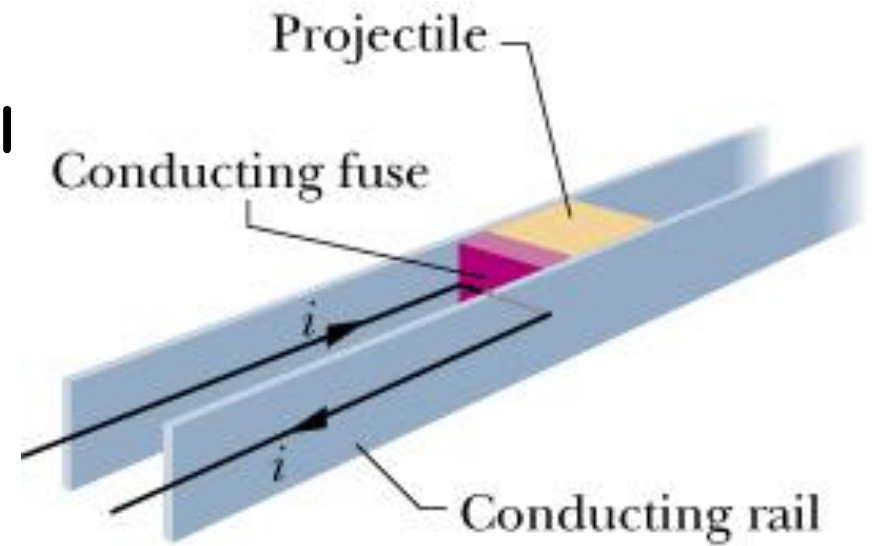


Rail Gun: An application is based on the B field produced by two antiparallel currents:

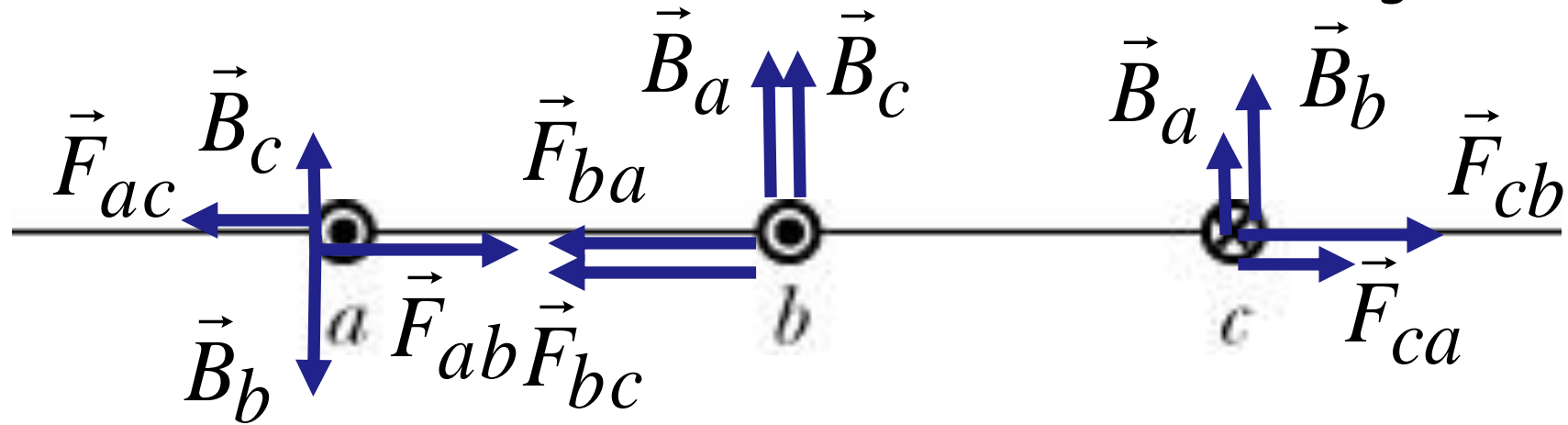
- Conducting fuse (e.g., a piece of copper) will melt and vaporize after the current passes through it, creating a conducting gas
- The magnetic field produced by the two currents are directed downward between the rails
- The field exerts a force on the gas, which is forced outward along the rails and thus the gas pushes the projectile

Example: A projectile of 5 tonnes (5000 kg) can be accelerated to a speed of 10 km/s within 1 ms

Rail Gun Test Fire



Checkpoint: The figure shows three long, straight, parallel, equally spaced wires with identical currents either into or out of the page. Rank the wires according to the magnitude of the force on each due to the currents in the other two wires, greatest first.



The net force acting on current b:

$$F_b = F_{ba} + F_{bc} = \frac{\mu_0 L i_a i_b}{2\pi d} + \frac{\mu_0 L i_c i_b}{2\pi d} = \frac{\mu_0 L i^2}{2\pi d} \quad 2$$

For a:

$$F_a = F_{ab} - F_{ac} = \frac{\mu_0 L i_a i_b}{2\pi d} - \frac{\mu_0 L i_c i_b}{2\pi 2d} = \frac{\mu_0 L i^2}{2\pi d} \quad 1$$

For c:

$$F_c = F_{cb} + F_{ca} = \frac{\mu_0 L i_a i_b}{2\pi d} + \frac{\mu_0 L i_c i_b}{2\pi 2d} = \frac{\mu_0 L i^2}{2\pi d} \quad 3$$

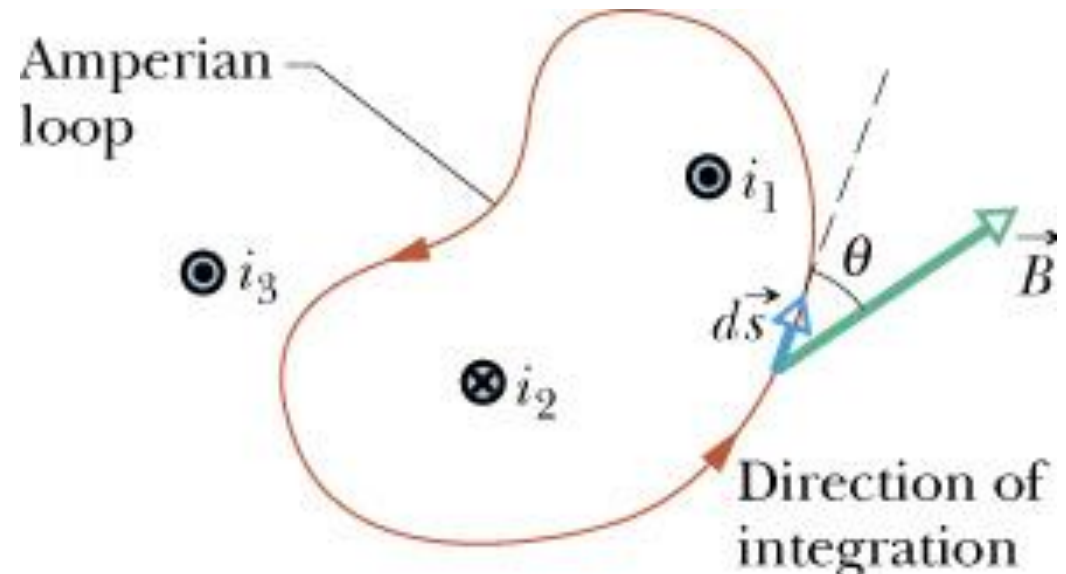
2

4.8. Ampere's Law:

- In the previous chapter, we use **Gauss' law** to determine the net electric field due to some symmetric distributions of charges (planar, cylindrical, spherical symmetry)
- Here, to determine the net magnetic field due to some symmetric distributions of currents we use **Ampere's law**:

$$\oint \vec{B} d\vec{s} = \mu_0 i_{enc}$$

where i_{enc} is the net current encircled in the **Amperian loop**



- To apply Ampere's law:
 - Arbitrarily choose the direction of integration
 - Arbitrarily assume \vec{B} to be generally in the direction of integration
 - Use the curled-straight right-hand rule (see the next slide) to assign a plus sign or a minus sign to each of the currents

The curled-straight right hand rule:

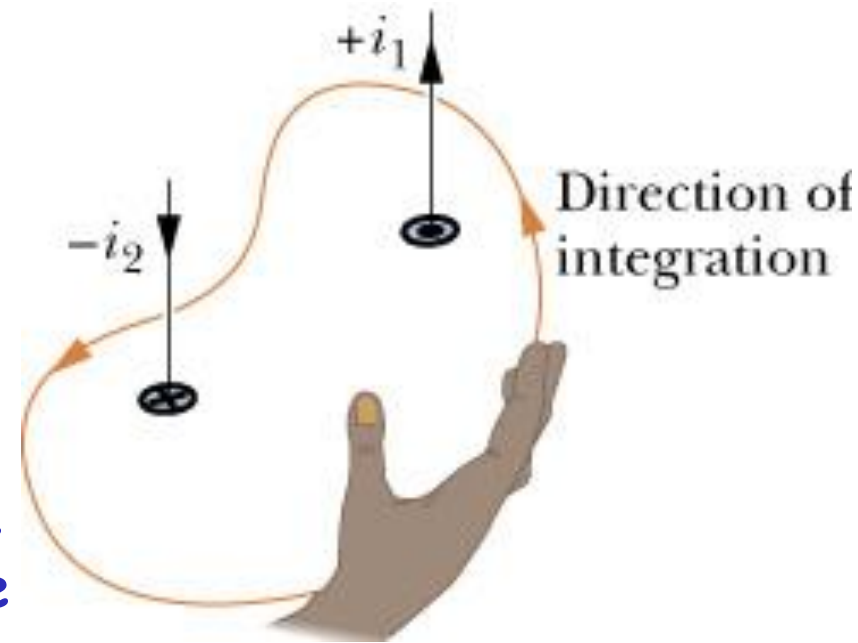
✚ Curl your right hand around the Amperian loop, with the fingers pointing in the direction of integration. A current through the loop in the general direction of your outstretched thumb is assigned a plus sign, and a current generally in the opposite direction is assigned a minus sign

$$i_{enc} = i_1 - i_2$$

$$\oint B \cos \theta ds = \mu_0 i_{enc} = \mu_0 (i_1 - i_2)$$

✚ **Question:** Why current i_3 contributes to the B field magnitude on the left side of the equation above but i_3 is not in the right side?

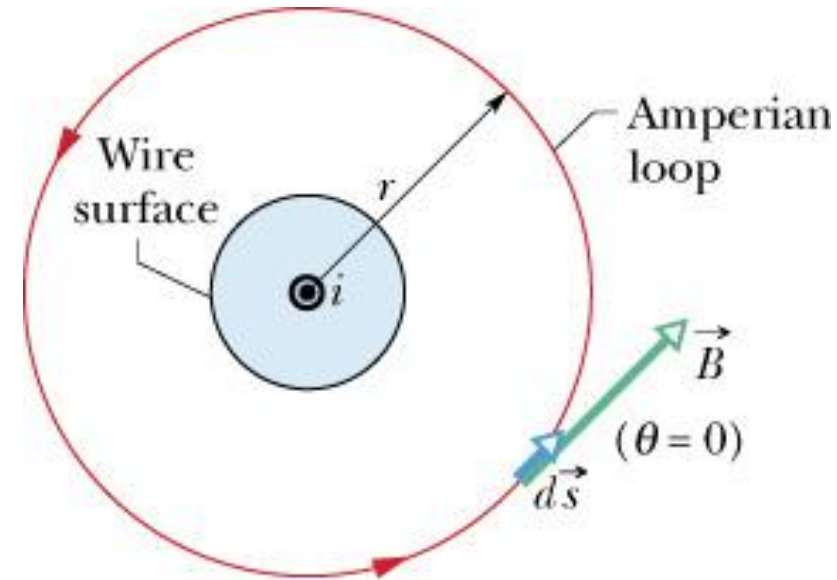
Because its contributions to the B field cancel out as the integration is made around a closed loop. In contrast, the contributions of an encircled current to the magnetic field do not cancel out



4.8.1. The Magnetic Field Outside a Long Straight Wire with Current:

Here, we use Ampere's law to find the B field at a point outside and produced by a long, straight wire. The direction of integration is counterclockwise:

$$\oint B \cos \theta ds = B \oint ds = B(2\pi r)$$



Using the right-hand rule, the current i is positive:

$$B(2\pi r) = \mu_0 i$$

so, we obtain:

$$B = \frac{\mu_0 i}{2\pi r}$$

This is the field that we derived using the Biot-Savart law, but here the calculation is quite simple

4.8.2. The Magnetic Field Inside a Long Straight Wire with Current:

We use Ampere's law to find the B field inside a long, straight wire with current. The direction of integration is counterclockwise:

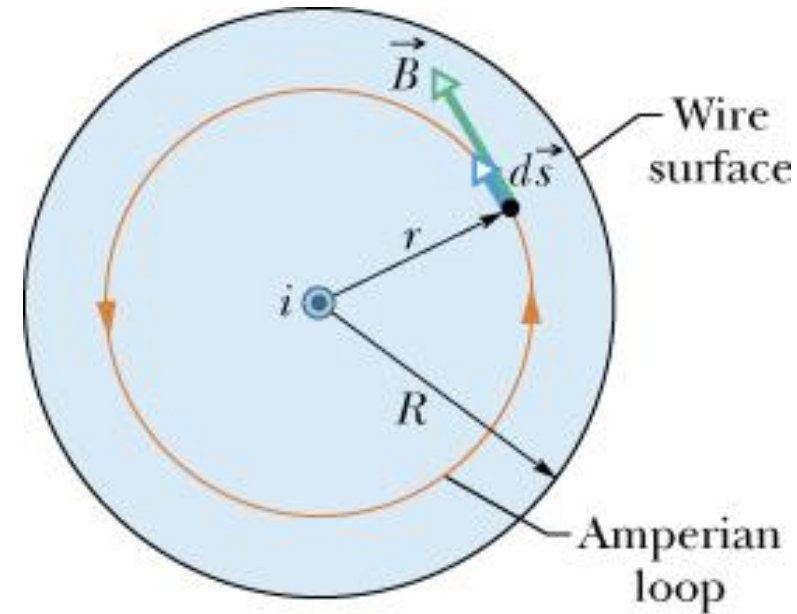
$$\oint B \cos \theta ds = B \oint ds = B(2\pi r)$$

If the current is uniformly distributed:

$$i_{\text{enc}} = i \frac{\pi r^2}{\pi R^2}$$

so, we obtain:

$$B(2\pi r) = \mu_0 i \frac{\pi r^2}{\pi R^2} \Rightarrow B = \left(\frac{\mu_0 i}{2\pi R^2} \right) r$$




So, B = 0 at the center and maximum at the surface

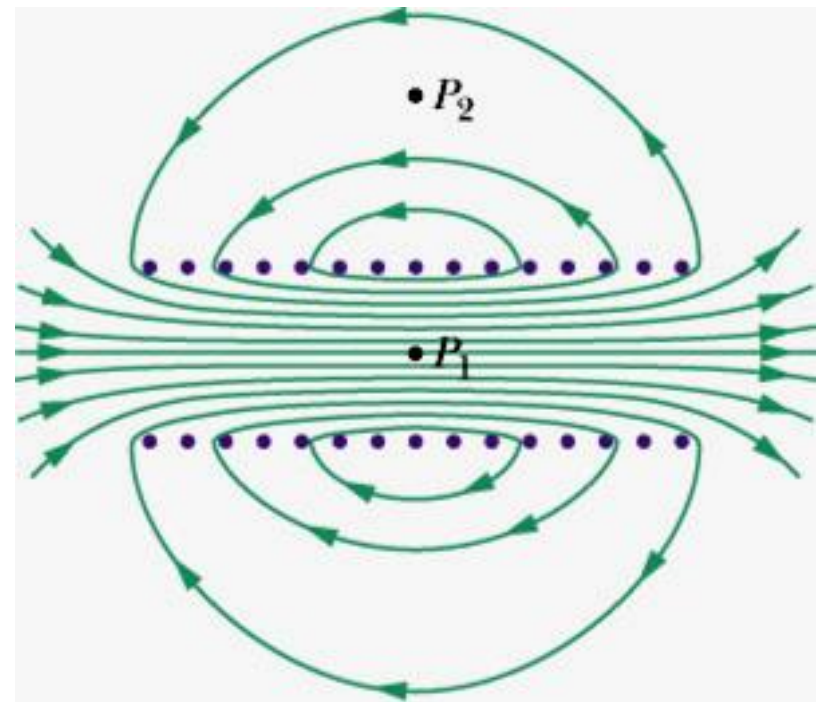
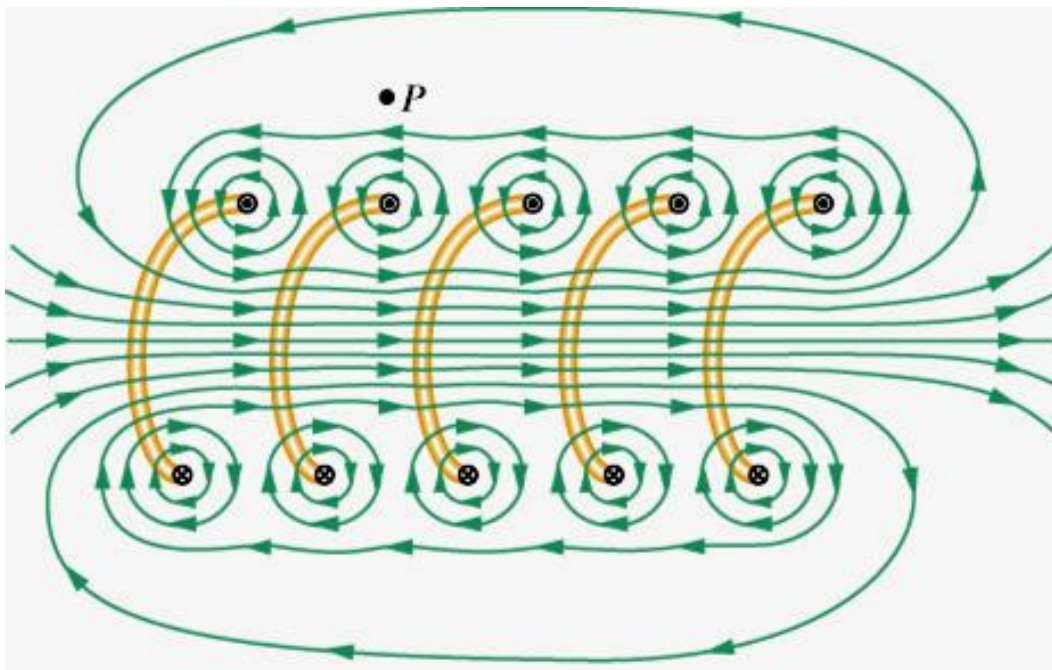
4.9. The Magnetic Field of a Solenoid and a Toroid:

4.9.1. Magnetic Field of a Solenoid:

Solenoid: A long, tightly wound helical coil of wire
The magnetic field produced by a solenoid carrying current i is shown: the field is strong and uniform at interior points but relatively weak at external points



A vertical cross section through the central axis of a current-carrying solenoid



The field direction along the solenoid axis is determined by the curled-straight right-hand rule

Calculate the magnitude of the magnetic field inside an ideal solenoid:

Ampere's law:

$$\oint \vec{B} d\vec{s} = \mu_0 i_{enc}$$

$$\oint \vec{B} d\vec{s} = \int_a^b \vec{B} d\vec{s} + \int_b^c \vec{B} d\vec{s} +$$

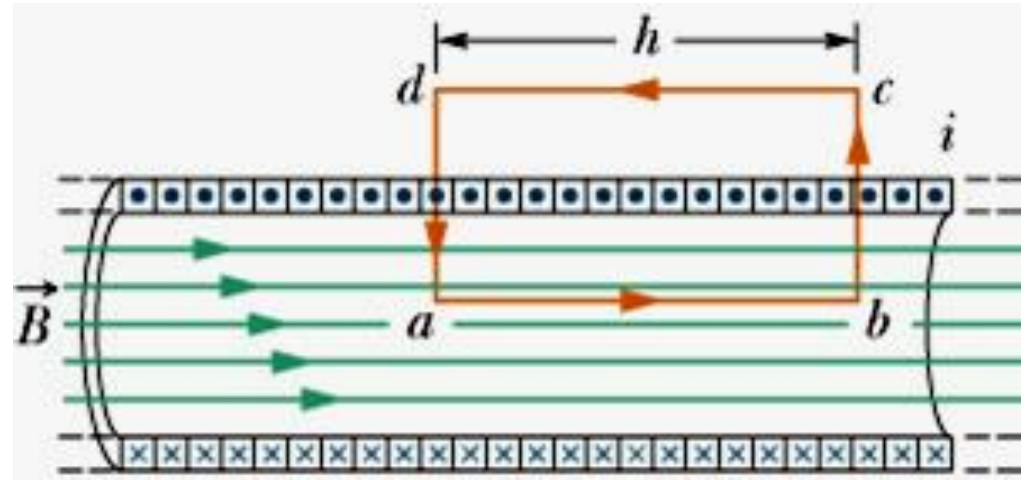
$$+ \int_c^d \vec{B} d\vec{s} + \int_d^a \vec{B} d\vec{s} = Bh + 0 + 0 + 0 = Bh$$

For external points of an ideal solenoid: $B = 0$, so the third integral $c \rightarrow d$ is zero

$$i_{enc} = i(nh)$$

where n is the number of turns per unit length

$$B = \mu_0 i n$$



4.9.2. Magnetic Field of a Toroid:

Toroid: It is a solenoid curved until its two ends meet

The field inside a toroid can be calculated using Ampere's law. We choose an Amperian loop as shown and the direction of integration is clockwise:

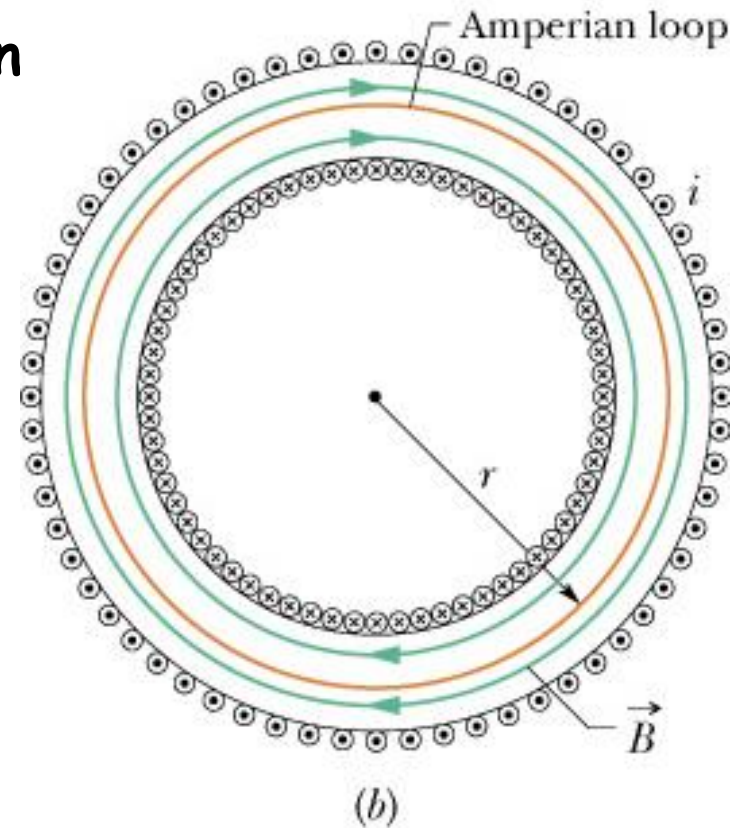
$$B2\pi r = \mu_0 i_{enc} = \mu_0 iN$$

N: the total number of turns

$$\Rightarrow B = \frac{\mu_0 iN}{2\pi r}$$

So, the field in a toroid is not uniform like a solenoid, $B \sim 1/r$

The direction of magnetic fields is also given by the curled-straight right-hand rule



[Animation](#)

4.10. The Magnetic Field of a Current-Carrying Coil:

Recall: A current-carrying coil behaves as a magnetic dipole, if we place it in an external magnetic field \vec{B}_{ext} , a torque acting on it:

$$\vec{\tau} = \vec{\mu} \times \vec{B}$$

$$\mu = NiA$$

N: the number of turns of the coil

Magnetic field of a Coil:

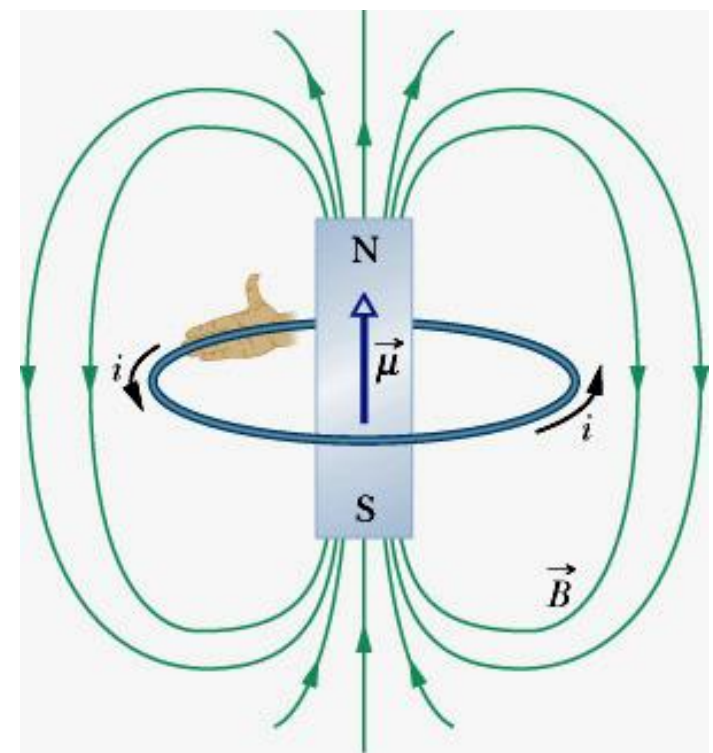
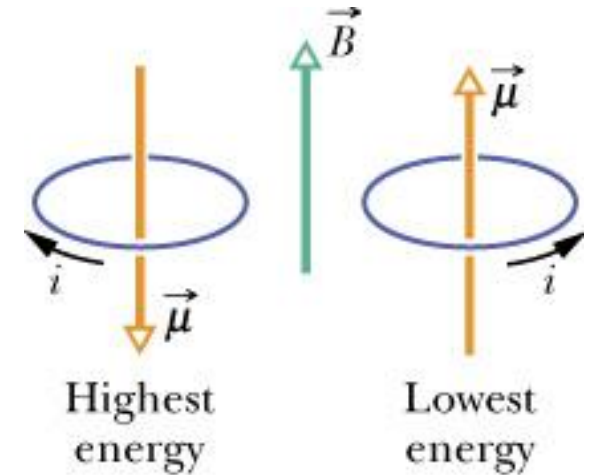
The field at a point on the central axis of the coil:

$$B(z) = \frac{\mu_0 i R^2}{2(R^2 + z^2)^{3/2}} \quad (1)$$

if $z \gg R$:

$$B(z) \approx \frac{\mu_0 i R^2}{2z^3}$$

[Animation](#)



For a coil of N turns and A is the area of the loop:

$$B(z) = \frac{\mu_0 NiA}{2\pi z^3}$$

\vec{B} and $\vec{\mu}$ have the same direction

$$\vec{B}(z) = \frac{\mu_0}{2\pi} \frac{\vec{\mu}}{z^3}$$

So, we have 2 ways to consider a current-carrying coil as a magnetic dipole:

- (1) it experiences a torque in an external magnetic field
- (2) it generates its own intrinsic magnetic field, acting as a magnet

Homework: Read proof of equation (1)

Homework: 4, 7, 12, 16, 18, 22, 35, 38, 43, 46, 49, 50,
57, 62 (pages 783-788)